

# Maths Home Learning

Week Beginning 7.03.2022


# This week...

- Day 1 - All about number 7.
- Day 2 - Finding 7.
- Day 3 - Recognising 7.
- Day 4 - Writing 7.
- Day 5 - Counting 7.

# Day 1

All About Number 7.

What number is this?




Can you write this?

What numicon piece is this?



Can you write this number?


How many fingers are the hands showing?



Can you write this number?

Now watch the number block clip to learn all about the number 7.

<https://www.bbc.co.uk/iplayer/episode/b08pgqt4/numberblocks-series-2-seven>



Day 2

# Day 2

- Finding 7.

0 1 2 3 4 5 6 7 8 9 10


Warm up you maths brain by counting forwards and backwards to 10!



# Day 2

- Finding 7.

What number is this?



Can you write this?

Today's Task:

Look around your house for things you have 7 of.

Can you find:



7 t-shirts?

7 pieces of pasta?



What else do you have 7 of?

Draw a picture of the 7 things in your homework book and write the number 7.


Now watch the number block clip to recap the number 7.

<https://www.bbc.co.uk/iplayer/episode/b08pgqt4/numberblocks-series-2-seven>

# Day 3

- Recognising 7.

What number is this?



Can you write this?

Can you find all the number 7's below.

|   |   |   |   |   |   |   |   |
|---|---|---|---|---|---|---|---|
| 6 | 5 | 3 | 4 | 3 | 8 | 7 | 4 |
| 2 | 3 | 9 | 1 | 6 | 5 | 4 | 3 |
| 3 | 1 | 4 | 2 | 8 | 9 | 3 | 2 |
| 1 | 3 | 5 | 3 | 6 | 3 | 2 | 5 |
| 7 | 6 | 3 | 4 | 3 | 4 | 1 | 3 |

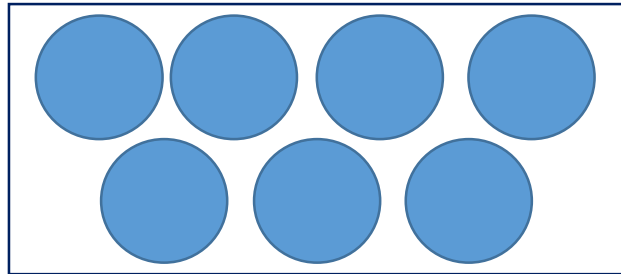
Feeling Brave? What other numbers can you see?

Can you be the teacher?

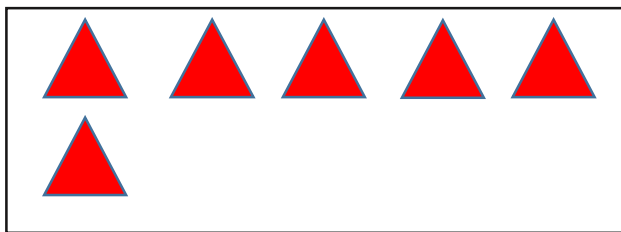
Tick which of these are correct and showing an amount of 7?



7



7



7


# Day 4

- Writing 7.

What number is this?



Can you write this?




Trace over the number with  
your finger.



Copy this into your homework book.

Draw objects of 7 in this box.



7 7 7 7 7 7 7 7 7


7 7 7 7 7 7 7 7 7

seven seven seven

# Day 5

- Counting 7.

What number is this?



Can you write this?

Can you count these objects ...

