

# Maths Home Learning

Week Beginning 24.01.2022

# This week...

- Day 1 - Number 8
- Day 2 - Number 8
- Day 3 - Subtraction
- Day 4 - Subtraction
- Day 5 - Subtraction

# Day 1- Number 8

Let's warm our maths brains up today.

Can you count to 10 forwards and backwards?

# Day 1- Number 8

Can you tell me what these numbers are?

4

5

8

2

1

9


What number is this?




What numicon piece is this?



How many fingers can you see?



Now let's try and write the number 8

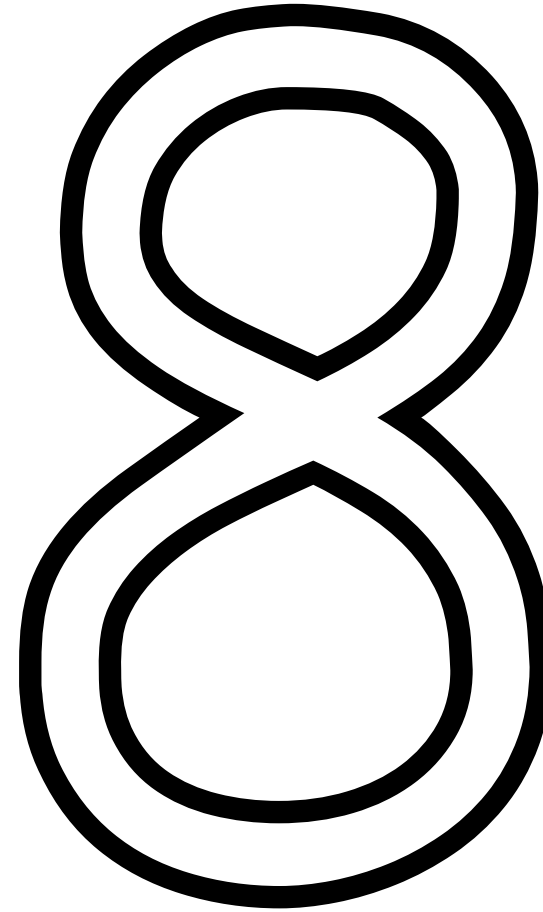




Make an 's' and do  
not wait



When it's joined up  
you have an eight.



Trace over the number with your finger.

Now watch the number block clip to learn all about the number 8.

<https://www.bbc.co.uk/iplayer/episode/b08pgvmb/numberblocks-series-2-eight>

# Day 2

What number is this?

- Finding 8.



Today's Task:

Look around your house for things you have 8 of.

Can you find:

8 toys?



8 colouring pencils?



What else do you have 8 of?

Draw a picture of the 8 things in your homework book and write the number 8.

# Day 3

Today we are learning to subtract by taking away.

- Work through the following slides.

5 dinosaurs are feeding on grass.



1 dinosaur hears a noise and runs away. How many are still feeding?

$$5 - 1 = 4$$

5 dinosaurs are feeding on grass.



2 dinosaurs hear a noise and run away. How many are still feeding?

$$5 - 2 = 3$$

5 dinosaurs are feeding on grass.



3 dinosaurs hear a noise and run away. How many are still feeding?

$$5 - 3 = 2$$



5 dinosaurs are feeding on grass.



4 dinosaurs hear a noise and run away. How many are still feeding?

$$5 - 4 = 1$$

5 dinosaurs are feeding on grass.



5 dinosaurs hear a noise and run away. How many are still feeding?

$$5 - 5 = 0$$

# Day 4

Today we are learning to subtract by taking away.


- Work through the following slides.

# Day 4

Today we are learning to subtract by taking away.

There are 3 yummy icecreams.

A seagull comes along and steals 1. How many will be left?


$$- 1 =$$
$$3 - 1 =$$



# Day 4

Today we are learning to subtract by taking away.

There are 5 beautiful butterflies.

3 fly away. How many will be left?




$$5 - 3 =$$

# Day 4

Today we are learning to subtract by taking away.

There are 7 petals on a flower.

5 blow away. How many will be left?



$$- 5 =$$

$$7 - 5 =$$

# Day 4

Today we are learning to subtract by taking away.

There are 7 candles on a birthday cake.

3 are blown out. How many will be left?



$$- 3 =$$

$$7 - 3 =$$

# Day 5 Subtraction

Watch the videos below to learn more about subtraction.

<https://www.bbc.co.uk/teach/class-clips-video/maths-ks1-subtracting-1-from-5/zv4kjhv>

<https://www.bbc.co.uk/teach/class-clips-video/maths-ks1-subtracting-2-from-4/z4wqxyc>



Don't forget to email your work to  
your teacher!

ra@hortongrangeacademy.co.uk - Miss Bedford

rb@hortongrangeacademy.co.uk - Mrs Bibi

rc@hortongrangeacademy.co.uk - Miss Goodwin