

Maths Home Learning

Week Beginning 17.01.2022


This week...

- Day 1 - All about number 7.
- Day 2 – 1 less.
- Day 3 - Recognising 7.
- Day 4 -Writing 7.
- Day 5 - Counting 7.

Day 1

All About Number 7.

What number is this?




Can you write this?

What numicon piece is this?



Can you write this number?


How many fingers are the hands showing?



Can you write this number?

Now watch the number block clip to learn all about the number 7.

<https://www.bbc.co.uk/iplayer/episode/b08pgqt4/numberblocks-series-2-seven>




Day 2

• 1 Less

0 1 2 3 4 5 6 7 8 9 10



Warm up your maths brain by counting forwards and backwards to 10.
Now work through the following slides.

Goldilocks is going on an adventure through the woods. Can you help her?




Goldilocks finds a flower.

There is 1 flower. I really want to pick it. Do you think I should?




If Goldilocks picks the flower there will be 1 less. What is 1 less than 1?





Well done! 1 less than 1 is 0 .
Goldilocks! You should not have picked the
flower.

Goldilocks finds some acorns that a squirrel has been saving.

Look! 2 beautiful acorns. I would like to take one. Do you think I should?





If Goldilocks takes an acorn there will be 1 less. What is 1 less than 2?





Well done! 1 less than 2 is 1.
Goldilocks! You should not have taken the
acorn. The squirrels will be hungry.

Goldilocks finds some pinecones that have fallen from a tree.

Look! 3 pretty pinecones. I would like to take one. Do you think I should?





If Goldilocks takes a pinecone there will be 1 less. What is 1 less than 3?




Well done! 1 less than 3 is 2.
Goldilocks! You should not have taken the
pinecone.

Goldilocks finds some logs that the three bears have been collecting.

Look! 4 logs. I would like to take one home. Do you think I should?



If Goldilocks takes a log there will be 1 less. What is 1 less than 4?



Well done! 1 less than 4 is 3.
Goldilocks! You should not have taken the
pinecone. The bears will be cross.

Day 3

• 1 Less

0 1 2 3 4 5 6 7 8 9 10

Warm up your maths brain by counting forwards and backwards to 10.
Now work through the following slides.

The zookeeper is trying to count the animals but the cheeky monkey keeps helping them to escape!



How many lions are there?



Well done! There are 4 lions.
If the monkey lets one escape there will be one less.
What is 1 less than 4?

How many lions are there?



Well done! 1 less than 4 is 3.
The zookeeper will be cross when she finds out!

How many parrots are there?




Well done! There are 3 parrots.
If the monkey lets one escape there will be one less.
What is 1 less than 3?

How many lions are there?



Well done! 1 less than 3 is 2.
The zookeeper will be cross when she finds out!

How many zebras are there?



Well done! There are 5 zebras.
If the monkey lets one escape there will be one less.
What is 1 less than 5?

How many lions are there?



Well done! 1 less than 5 is 4.
The zookeeper will be cross when she finds out!

Day 4


- Subtraction by taking away

0 1 2 3 4 5 6 7 8 9 10

Warm up your maths brain by counting forwards and backwards to 10.
Now work through the following slides.

Today we are learning to subtract by
taking away.

Do you know what
this symbol means:



There are 4 lazy lions having a snooze.


2 get up and run away. How many will be left?



$$4 - 2 =$$

There are 6 dogs walking in the park.

3 go home. How many will be left?



$$6 - 3 =$$

There are 8 cars in a car park.

5 drive away. How many will be left?



$$8 - 5 =$$

There are 7 birds sitting in a tree.
3 fly away. How many will be left?



$$7 - 3 =$$

Day 5


- Subtraction by taking away

0 1 2 3 4 5 6 7 8 9 10

Warm up your maths brain by counting forwards and backwards to 10.
Now work through the following slides.


Today we are learning to subtract by
taking away.

Do you know what
this symbol means:



There are 4 sweets.

3 are eaten. How many will be left?



$$4 - 3 =$$

There are 5 cats in the garden.

2 run away after a mouse. How many will be left?



$$5 - 2 =$$


There are 3 helicopters at the airport.
1 flies away. How many will be left?



$$3 - 1 =$$

There are 5 apples in a tree.

3 fall off. How many will be left?



$$5 - 3 =$$

Don't forget to email your work
to your teacher!

ra@hortongrangeacademy.co.uk - Miss Bedford

rb@hortongrangeacademy.co.uk - Mrs Bibi

rc@hortongrangeacademy.co.uk - Miss Goodwin