

Maths Home Learning

Week Beginning 25.01.2021

Click on the link below to see the instructions for this weeks Maths Home Learning!

https://youtu.be/3_hpGB7Wuew

This week...

- Day 1 - All about number 9
- Day 2 - Finding 9
- Day 3 - Recognising 9
- Day 4 - Writing 9
- Day 5 - Counting 9

Click on the link to see Mrs Wilson teaching Day 1 maths this week.




<https://youtu.be/NLoDPWmUfZA>

Let's warm up our
maths brains and
count to 10



0 1 2 3 4 5 6 7 8 9 10


Let's have a quick game of
Who's got more?



Day 1


All About Number 9

What number is this?




Can you write this number?

What numicon piece
is this?



Can you write this
number?

How many fingers is
the hands holding up?



Can you write this
number?


Now watch the number block clip to learn all about the number 9

<https://www.bbc.co.uk/cbeebies/watch/numberblocks-the-nine-song>

Day 2

- Finding 9

What number is this?



Can you write this number?

Today's Task:

Look around your house for things you have of 9.

Can you find:

9 biscuits?



9 tissues?



What else do you have 9 of?

Draw a picture of the 9 things in your homework book and write the number 9.


Now watch the number block clip to recap the number 9

<https://www.bbc.co.uk/cbeebies/watch/numberblocks-the-nine-song>

Day 3

- Recognising 9

What number is this?



Can you write this number?

Can you find all the number 9's below.

7 5 4 3 1 9

4 3 9 7 8 1

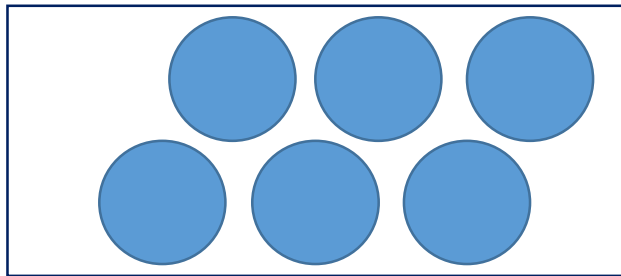
6 7 1 3 2 5

7 6 8 1 9 2


Feeling Brave? What other numbers can you see?

Can you be the teacher?

Tick which of these are correct and showing an amount of 9



9



9




9

Day 4

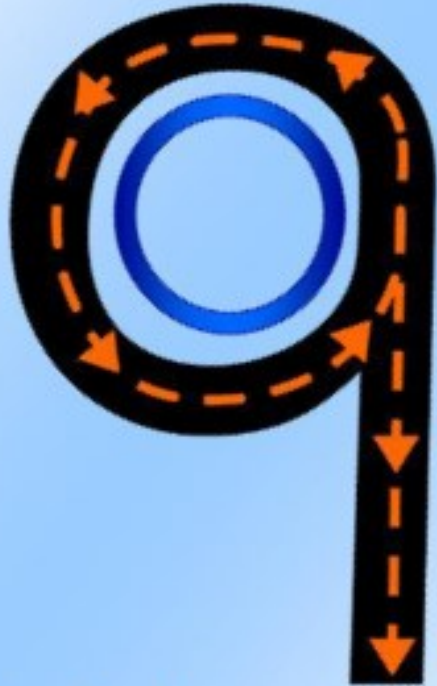
- Writing 9

What number is this?




Can you write this number?

Make a loop and then
a line,




That's the way we
make a nine.



Let's write the number 9.
Follow it with your finger.

Copy this into your homework book.

Draw objects of q in this box.




q q q q q q

q q q q q q

Day 5

- Counting 9 .

What number is this?



Can you write this number?

Can you count these objects ...



Write the amount in each box

Have a try at this quiz!

https://forms.office.com/Pages/ResponsePage.aspx?id=jp2v5jm_FEyFW3PuNqNMc_QMg6rqC2ZMjp6ZGwGOdG5UREMzN0FXRUNZTUVZTU1LM0hKR0JTMUo4US4u

Don't forget to email your work to your teacher!

ra@hortongrangeacademy.co.uk - Miss Bedford

rb@hortongrangeacademy.co.uk - Miss Beaumont

rc@hortongrangeacademy.co.uk - Mrs Wilson