

Maths Home Learning

Week Beginning 18.01.2021

Click on the link below to find out what were doing in Maths this week!

- <https://youtu.be/l0guzB-860>

This week...

- Day 1 - All about number 8.
- Day 2 - Finding 8.
- Day 3 - Recognising 8.
- Day 4 - Writing 8.
- Day 5 - Counting 8.

Click the link to see this lesson live!

- <https://youtu.be/j7EB14fRiQs>

Day 1- Number 8

Let's warm our maths brains up today.

Can you count to 10 forwards and backwards with me?

Day 1- Number 8

Can you tell me what these numbers are?

4

5

8

2

1

9


What number is this?




What numicon piece is this?



How many fingers can you see?



Now let's try and write the number 8



Now watch the number block clip to learn all about the number 8.

<https://www.bbc.co.uk/iplayer/episode/b08pgvmb/numberblocks-series-2-eight>

Day 2

What number is this?

- Finding 8.



Today's Task:

Look around your house for things you have 8 of.

Can you find:

8 toys?



8 colouring pencils?



What else do you have 8 of?

Draw a picture of the 8 things in your homework book and write the number 8.

Now watch the number block clip to recap the number 8.

<https://www.bbc.co.uk/iplayer/episode/b08pgvmb/numberblocks-series-2-eight>

Day 3

- Recognising 8.

What number is this?



Can you find all the number 8's below.

6	5	3	4	3	8	7	4
2	3	9	1	6	5	4	3
3	1	4	2	8	9	3	2
1	3	5	3	6	3	2	5
7	6	3	4	3	4	1	3

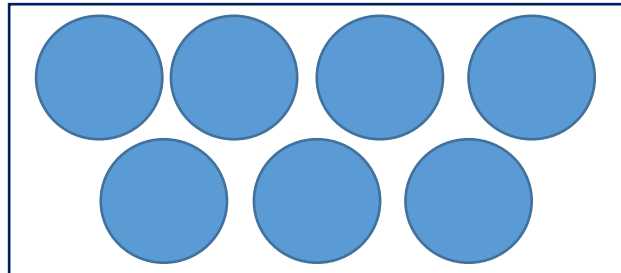
Feeling Brave? What other numbers can you see?

Can you be the teacher?

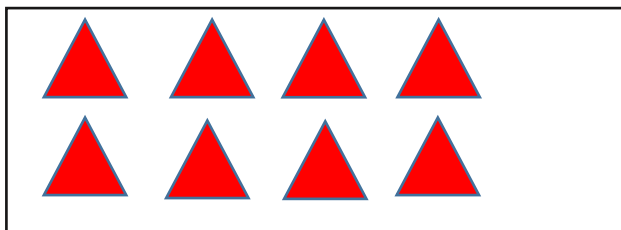
Tick which of these are correct and showing an amount of 8?



8



8



8


Day 4

- Writing 8.

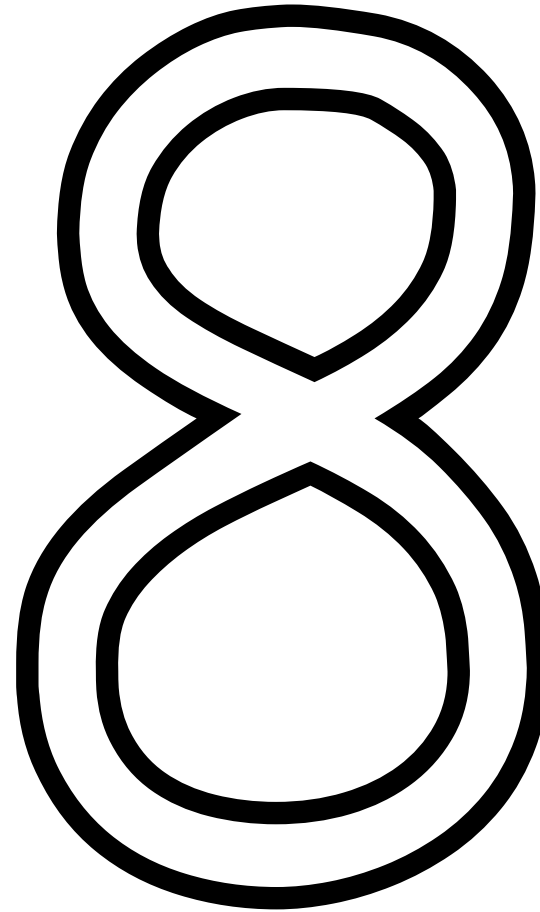
What number is this?



Make an 's' and do
not wait





When it's joined up
you have an eight.



Trace over the number with your finger.

Copy this into your homework book.

Draw objects of 8 in this box.



eight eight eight

Day 5

- Counting 8.

What number is this?



Can you count to 10?

1 2 3 4 5 6 7 8 9 10

Now can you point to the number 8 on the numberline?

That's right it's the number underlined!
Well done!

1 2 3 4 5 6 7 8 9 10

Can you count these objects ...
Write the amount in your books.



Don't forget to email your work to
your teacher!

ra@hortongrangeacademy.co.uk - Miss Bedford

rb@hortongrangeacademy.co.uk - Miss Beaumont

rc@hortongrangeacademy.co.uk - Mrs Wilson